

RAMAKRISHNA SENIOR SECONDARY
SCHOOL
M-BLOCK, VIKASPURI, NEW DELHI



SUMMER HOLIDAY HOMEWORK

CLASS – III

*Have an
awesome
Summer!*



Dear Parents

Greetings from the RKS Fraternity!

The Academic Session 2026–27 has begun in full swing, and the students have settled well into their classes. Now it is time for the Summer Break. The school will remain closed for Summer Break for Classes LKG to VIII from May 17, 2026 to June 30

2026, and will reopen on July 1, 2026.

Summer vacations are the most awaited holidays for students. It is also a time to enjoy the little pleasures of life that often get overlooked during the busy school routine. Students return to school refreshed and rejuvenated after a much-needed break.

There are a few things that students can keep in mind to utilize this break fruitfully:

- Go for educational trips and excursions.
- Spend quality time with family and friends.
- Pursue your hobbies and interests.
- Sharpen your skill and develop new ones.
- Follow a fitness regime to stay agile both mentally and physically.
- Follow a fitness regime to stay agile both mentally and physically.
- Learn and get exposure to new things.
- Relax your body and mind because, “A Healthy Mind Lives in a Healthy Body”
- Develop the habit of reading, books, newspapers and magazines.

- Revise important concepts learnt during the session to strengthen understanding.
- Limit excessive screen time and use digital devices wisely.
- Practice good manners, discipline, and positive behaviour at home and outside.
- Stay safe and follow necessary precautions while travelling or engaging in outdoor activities. In order to keep our students meaningfully engaged, Summer Holiday Homework will be available on the school website: www.rks.net.in.

“We wish all our students a delightful, safe, and productive Summer Break!”

Regards
Principal

**HAVE A DELIGHTFUL AND PRODUCTIVE
SUMMER BREAK!**

ENGLISH

1. Revise the syllabus of P.T- 1.
2. Read a story and pick out 15 difficult words from the story and frame sentences. (Do it on A-4 sheet and paste it in the notebook).
3. Do page-72 in English grammar book.

ACTIVITY TIME-

Make a beautiful collage using pictures of Proper nouns and Common nouns. (Do this activity on A-4 size sheet)

हिंदी

1. पाठ्यपुस्तक प्रबोध पाठ- 1,2, 3, 4 पढ़ो और हफ्ते में एक- एक बार 10 शब्दों की श्रुतलेख लिखो। (कक्षा कार्य कॉपी में कार्य करिए)
 2. पांच पेज की सुलेख हिंदी की कॉपी में करो।
 3. हिंदी की कॉपी में विद्यालय से संबंधित एक चित्र चिपकाकर उस पर दस पंक्तियां लिखो।
 4. प्रथम आवधिक परीक्षा का सारा कार्य याद करो।
-

MATHEMATICS

1. **Revise Syllabus of PT-1**
 - a. **Ch-1 Large Numbers**
 - b. **Ch-2 Addition**
2. **Do Subject Enrichment Activity: Make a table booklet from (2 – 10) and decorate it.**
3. **Get the printouts of the following worksheets. Complete them and paste in your Notebooks.**

Assignment on Computational Thinking

1. **Find the largest number name that is hidden in the series given below.**

Note: *The letters in the number name should appear Together as continuous letters.*

- a) 60
 - b) 6
 - c) 20
2. **Roy's favorite number has:**
 - 3 letters in its name
 - The number of vowels is double the number of consonants in its name what is Roy's favorite number?
 - a) 2
 - b) 6
 - c) 10
 3. **If each of the given boxes follows the same theme, what will come in place of “?”**



a) NINE3

b) THREE9

c) THREE3

d) 9THREE

4. If each of the following terms follows the same theme, what will come in place of "?"

One-3 → 1 2 3	Six-4 → 6 7 8 9
Three-5 → 3 4 5 6 7	Four-3 → ?

a) 4 5 6 7

b) 3 4 5

c) 4 5 6

d) 3 4 5 6

5. If each of the following terms follows the same theme, what will come in place of “?”

a)

d)

b)

c)

6. Find the odd one out.

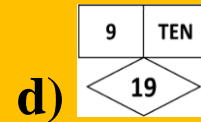
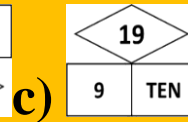
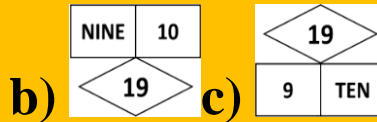
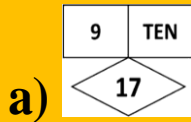
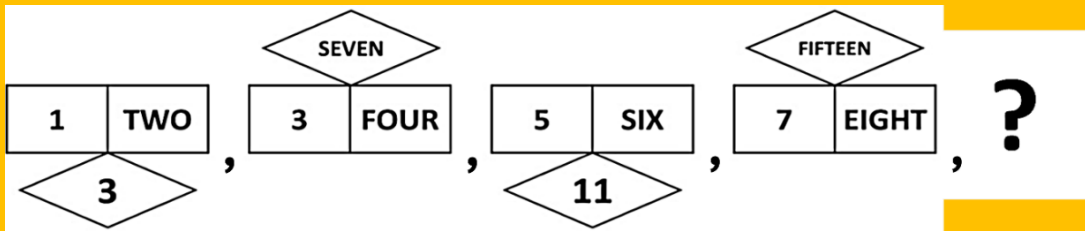
a)

b)

c)

d)

11. What will come in place of "?" in the given series?



12. If you were to write the numbers given below in words, spelling of which of them would have exactly one vowel in it?

a) 1

b) 2

c) 5

d) 9

13. X is a single digit number. If X has exactly five letters in its spelling, how many different values can X possibly have?

Note: If a letter is repeated in the spelling of X, it has to be counted as many times as it appears in the spelling. For example, the word "NINE" has 4 letters and not 3 letters

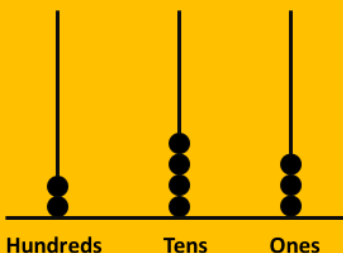
a) 1

b) 2

c) 3

d) 4

14. At minimum, how many more beads are required to show number 496 on the given abacus?



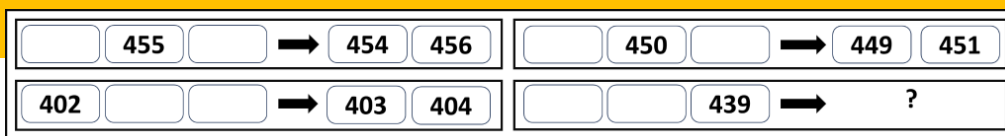
a) 487

b) 253

c) 10


d) 11

15. If each of the following terms follows the same theme, what will come in place of "?"



- a) 438 440 b) 440 441
 c) 437 438 d) 438 437

16. Each shape has a digit in it. Which of the following numbers in the options can be formed by using the digits in the **CIRCLES** only?



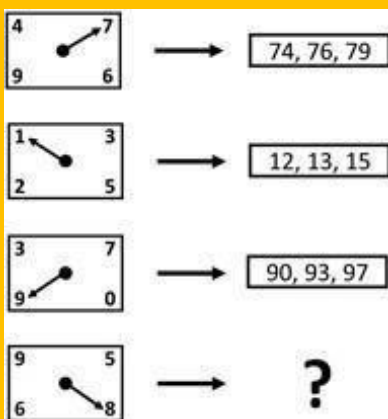
- a) 615 b) 142 c) 467 d) 146

17. How many numbers will remain after Sam cancels all numbers less than 432 and all numbers greater than 567 in the set given below?

451, 430, 568, 411, 392, 517, 533, 578, 420, 525, 566, 616, 571, 436

- a) 5 b) 6 c) 7 d) 8

18. What will come in place of "?"



- a) 89, 86, 85 b) 85, 86, 89
 c) 86, 89, 85 d) 85, 89, 86

19. If you remove all the numbers greater than 5 from row 1, all the numbers less than 4 from row 2, and all the numbers greater than 7 from row 3, then which row will have the largest count of numbers remaining?

Row 1	8	4	1	7	2	6
Row 2	5	2	7	0	3	1
Row 3	4	6	8	9	5	1


- a) Row 1 b) Row 2
 c) Row 3 d) Both rows 1 and 3
 have equal numbers

20. Given below is a game board of snakes and ladders. Which ladder is most beneficial?

21	22	23	24	25	26	27	28	29	30
	19	18	17	16	15	14	13	12	11
1	2	3	4	5	6	7	8	9	10

- a) Black b) Blue c) Red d) Green

21. In the image given below, what is the maximum number of dots that can be connected by drawing a single straight line?



- a) 3 b) 4 c) 5 d) 6

22. The rabbit has to reach the end of the path by stepping on EACH block WITHOUT skipping any blocks in between. It collects an item from every 5th

- 5. Revise PT-1 syllabus (Ch- 1, 2 and 6)**
 - 6. Prepare a small First Aid kit from a box for your class containing necessary items like band aid, hajmola, cotton, Dettol, vicks, balm, pudin hara, soframycin or betadine etc.**
 - 7. Plant a small plant in a nearby park or garden. Write your name with school name on a label and place it near the plant. Nurture the plant with care and water it daily. Click a coloured photograph of the activity. Take a coloured printout and paste it neatly in your science notebook.**
-

SOCIAL STUDIES

- 1. Draw a wall hanging demonstrating the "Good Food Habits" and practice them daily at school and at home.**
- 2. Subject Enrichment Activity (Do in S.St. Notebook)**
 - a. Create a chart of Edible Rainbow by arranging different colored food pictures. (Red, Orange, Yellow, Green, Blue/Purple)**
 - b. Draw or paste any 4 pictures showing the dresses worn by men and women in different cultures.**
- 3. On an A4 Size colored sheet make a Solar System from cut out of colored paper showing different planets on the Orbit. Paste the sheet in S.St. notebook.**
- 4. Practice cleanliness in your surroundings; carry a plastic bag for throwing garbage. Stay hydrated by carrying your reusable water bottle wherever you go.**
- 5. Revise Ch 1, 2 and 5 for Periodic Test-1.**

COMPUTER

- 1. Draw and color any 4 computer hardware devices in your notebook. Write their names and uses.**
 - 2. Make a table with two headings: Hardware and Software. Write any 5 examples of each.**
 - 3. Make a colorful collage in notebook on: “Uses of Computer in Daily Life”**
 - 4. Learn the Syllabus of PT-1 and complete assignments in your notebook.**
-

ART & CRAFT

- 1. Art work: Make (a collage with paper on topic scenery. (Refer page no -18)**
 - 2. Draw a clown fish with handprint in sketch file. (Refer page no - 33)**
 - 3. Craft- Make a party mask with paper and glitter sheet. (Refer page no-23)**
-

GENERAL KNOWLEDGE

- 1. Do pages from 11 to 20 in the G.K. BOOK itself.**
- 2. Write 15 Current Affairs in your G.K. notebook.**