





**Ques 2 Change the Number -:**

- a) horse
- b) desk
- c) potato
- d) loaf
- e) lion
- f) class
- g) watch
- h) bench
- i) child

---

**Ques 3 Change the gender-:**

- a) boy
- b) dog
- c) nephew
- d) lion
- e) actor
- f) uncle
- g) sir
- h) man
- i) king

---

**Ques 4 Rearrange the jumbled sentences-**

- 1. funny/is/very/sister/my
- 2. an/architect/is/father/my
- 3. hobby/is/dancing/my/favourite
- 4. fo/us/cooks/dinner/she
- 5. a/burger/want/I
- 6. the/apple/where/is/

---

**PICTURE COMPOSITION**

**Ques 1 Write 5-6 lines about the picture -:**



---

---

---

---

---

रामाकृष्णा उच्चतर माध्यमिक विद्यालय  
प्रथम आवधिक परीक्षा (प्रश्नकोष) (2026-27)

कक्षा- तीसरी  
विषय-हिंदी  
खण्ड (क)

प्रश्न 1 निम्नलिखित गद्यांशों को पढ़कर पूछे गए प्रश्नों के उत्तर दीजिए।

(अपठित गद्यांश - 1)

राज के पास किट्टी नाम की एक पालतू बिल्ली है। वह सफेद और भूरे रंग की है। राज को अपने घर के पिछे किट्टी के साथ खेलना पसंद है। वे दोनों साथ में तितलियों का पीछा करते हैं और घास में लौटते हैं। जब राज उसे पकड़ता है तो किट्टी उसे घूरने लगती है। राज अपनी बिल्ली से बहुत प्यार करता है।

- क) राज की पालतू बिल्ली का नाम क्या है?
- ख) किट्टी किस रंग की है?
- ग) राज और किट्टी कहाँ खेलते हैं?
- घ) जब राज उसे पकड़ता है तो किट्टी क्या करती है?

(अपठित गद्यांश 2)

एक बार एक छोटा सा आम का पेड़ अपनी कहानी सुना रहा था। वह कह रहा था, "मैं पहले छोटा सा बीज था। फिर मैं पानी, मिट्टी और सूरज की मदद से बड़ा हो गया। अब मैं बहुत ऊँचा और खुश हूँ।"

- क) आम का पेड़ क्या सुना रहा था?
- ख) आम का पेड़ पहले क्या था?
- ग) आम के पेड़ ने बड़ा होने के लिए किन चीजों की मदद ली?
- घ) 'सूरज' शब्द का पर्यायवाची लिखिए।

(अपठित गद्यांश -3)

आज रानी पिकनिक पर जा रही है। वह चिड़ियाघर घूमने जा रही है। वह सभी जानवरों को देखने के लिए उत्साहित है। रानी का पसंदीदा जानवर जिराफ़ है। वह उसकी लंबी गर्दन और धब्बों से प्यार करती है। रानी को उम्मीद है कि वह आज जिराफ़ों को खाना खिला पाएगी। वह तस्वीरें लेने के लिए अपना कैमरा साथ लेकर जा रही है।

- क) आज रानी कहाँ जा रही है?
- ख) रानी का पसंदीदा जानवर कौन सा है?
- ग) रानी को जिराफ़ के बारे में क्या पसंद है?
- घ) रानी चिड़ियाघर में तस्वीरें लेने के लिए क्या ले कर जा रही है?

(अपठित गद्यांश - 4)

एक बंदर जंगल में खेल रहा था। वह एक पेड़ से दूसरे पेड़ पर कूद रहा था। दूसरे पेड़ पर पहुंचते ही उसने वहाँ बहुत सारे फल देखे। उसने एक बड़े से अमरूद को छोड़कर एक छोटे से बेर को पकड़ा। वह खुशी से नाच रहा था।

- क) बंदर कहाँ खेल रहा था ?
- ख) बंदर कहाँ कूद रहा था ?
- ग) बंदर ने क्या देखा ?
- घ) बंदर ने कौन सा फल पकड़ा ?

खण्ड (ख)

प्रश्न 2 निम्नलिखित शब्दों के लिंग बदलो।

क) पिता ख) बालक ग) पुत्र घ) नर ङ) मौसा च) बैल

प्रश्न 3 निम्नलिखित शब्दों के वचन बदलो।

क) पौधा ख) घड़ा ग) केला घ) बहन ङ) चश्मा च) नदी

प्रश्न 4 निम्नलिखित शब्दों के विलोम लिखिए।

क) अनाथ ख) सुख ग) अच्छा घ) अंधेरा ङ) ऊंच च) अंदर

प्रश्न 5 निम्नलिखित भाषाओं की लिपियां लिखिए ।

क) उर्दू ख) मराठी ग) हिंदी घ) संस्कृत ङ) अंग्रेज़ी च) जर्मन

प्रश्न 6 निम्नलिखित गिनतियों को शब्दों में लिखिए।

क) 20 ख) 13 ग) 11 घ) 8 ङ) 5 च) 4

खण्ड (ग)

प्रश्न 7 निम्नलिखित वैकल्पिक प्रश्नों के सही विकल्प चुनिए।

( पाठ-1 सच्चाई का फल )

1) नदी में से कौन निकला था?

क) राक्षस ( ) ख) परी ( ) ग) देवदूत ( )

2) देवदूत सबसे पहले कौन सी कुल्हाड़ी लाया था?

क) लोहे ( ) ख) चांदी ( ) ग) सोने ( )

3) लकड़हारा कुल्हाड़ी से क्या करता था?

क) लकड़ियां ( ) ख) दीवार ( ) ग) बर्फ ( )

(पाठ -2 चींटी की धरोहर )

1) चींटी का मज़ाक कौन उड़ा रहा था ?

क) चिड़िया ( ) ख) चूहा ( ) ग) तितली ( )

2) दाना मुंह में दबाकर कौन जा रहा था?

क) मच्छर ( ) ख) चूहा ( ) ग) चींटी ( )

3) चींटी को सबसे पहले कौन सा दाना मिला था?

क) चावल ( ) ख) गेहूं ( ) ग) दाल ( )

(पाठ -3 मिट्ठू)

1) मिट्ठू कौन था?

क) तोता ख) बंदर ग) लड़का

2) चीते के पंजे से कौन घायल हो गया था?

क) गोपाल ख) मिट्ठू ग) शेर

3) गोपाल मिट्ठू को ढूंढता हुआ किसके पिंजरे के पास पहुंच गया था?

क) शेर के ख) चीते के ग) मिट्ठू के

खण्ड (घ)

(धरोहर पाठ-1, 2, 3 )

प्रश्न 8 निम्नलिखित शब्दों के अर्थ लिखिए।

क) मोहित ख) आनंद ग) तरकीब घ) मुश्किल ङ) मरियल च) उदास, प्रण ज) नभ झ) डिगो

प्रश्न 9 निम्नलिखित शब्दों के वाक्य बनाओ।

क) चौपाल ख) हिम्मत ग) बुद्धि घ) संकट ड) प्रण च) आनंद  
प्रश्न 10 निम्नलिखित लघु प्रश्नों के उत्तर लिखिए।

(पाठ-1 हिमालय)

- क) हम सब कुछ कैसे पा सकते हैं?  
ख) इस कविता के रचयिता कौन हैं?  
ग) इस कविता में किसके बारे में बताया गया है?

(पाठ 2 बहादुर बित्तो)

- क) दूसरी बार शेर किसके साथ आया था?  
ख) शेर ने किसान से क्या मांगा था ?  
ग) किसान की पत्नी कैसी थी?

(पाठ -3 बांसुरीवाला)

- क) रामू बांसुरी को कहां फेंक आया था ?  
ख) बांसुरी की आवाज किसे मीठी नहीं लगी थी?  
ग) गांव में कौन आया था ?

प्रश्न 11 निम्नलिखित दीर्घ प्रश्नों के उत्तर लिखिए।

(पाठ-1 हिमालय)

- क) हिमालय कविता के रचयिता कौन हैं और हिमालय किस दिशा में स्थित है?  
ख) हिमालय कविता में किसके बारे में बताया गया है और हम सब कुछ कैसे पा सकते हैं?

---

(पाठ 2 बहादुर बित्तो)

- क) बित्तो क्या वेश बनाकर खेत में पहुंची ?  
ख) खेत में आकर शेर ने किसान से क्या कहा?

(पाठ 3 बांसुरीवाला)

- क) एक दिन बांसुरी वाले से लोगों ने क्या प्रार्थना की ?  
ख) बांसुरी की आवाज का लोगों पर क्या असर पड़ा?

RAMAKRISHNA SENIOR SECONDARY SCHOOL

QUESTION BANK (2026-2027)

SUBJECT – MATHS

CLASS – III

CHAPTER - 1 and 2

**Q1. Tick the correct option:**

**Ch-1 Numbers**

1. Place value of 8 in 7892 is  
a) tens    b) thousand    c) ones    d) hundred
2. Roman numeral for 23 is  
a) III    b) XXIII    c) XII    d) XIII
3. Face value of 4 in 4561 is  
a) 40    b) 4000    c) 4    d) 4000
4. Greatest 4 digit number that can be formed using 4,6,1,5  
a) 6666    b) 1465    c) 5641    d) 4156
5. An even number cannot have this digit in its ones place.  
a) 2    b) 5    c) 8    d) 4

**Ch-2 Addition**

6. If we add 0 to a number the sum is \_\_\_\_\_.  
a) 0    b) 1    c) place value    d) Number itself
7.  $500 + 200 =$  \_\_\_\_\_  
a) 250    b) 520    c) 200    d) 700
8. The successor of number 8972 is \_\_\_\_\_  
a) 8973    b) 8977    c) 8974    d) 8971
9.  $3425 + 1 =$  \_\_\_\_\_  
a) 3425    b) 3426    c) 2124    d) 5549
10. 2 hundreds + 5 tens + 6 ones = \_\_\_\_\_ + 50 + 6  
a) 20    b) 200    c) 2    d) 256

**Q2.Fill in the blanks:**

**Ch-1 Numbers**

1. The Hindu Arabic numeral for XXXVII is \_\_\_\_\_
2. The place value of 5 in 5234 is \_\_\_\_\_.
3. The face value of 6 in 1876 is \_\_\_\_\_.
4.  $1000+200+60+3=$  \_\_\_\_\_
5. The predecessor of 6756 is \_\_\_\_\_

**ch-2 Addition**

6.  $111 + 0 =$  \_\_\_\_\_
7.  $102 + 102 =$  \_\_\_\_\_
8.  $3167 +$  \_\_\_\_\_  $= 367$
9.  $697 + 1 =$  \_\_\_\_\_
10.  $5716 + 10 =$  \_\_\_\_\_

**Q3. Do as directed:**

**1. Write the predecessor and successor of 5437.**

**2. Write the numeral for the following:**

- i) Seven thousand five hundred sixty three.
- ii) Five thousand eight hundred forty two.
- ii) Six thousand one hundred nineteen
- iii) Eight thousand forty

**3. Write the number name of the following:**

- i) 6534      ii) 7353      iii) 7255      iv) 8789

**4. Write in expanded form:**

- i) 5633      ii) 4563      iii) 4524

**5. Write the place value of the underlined digits :-**

- i) 6546      ii) 9676      iii) 6213      iv) 7163

**6. Write the face value of the underlined digit:**

- i) 2456      ii) 8412      iii) 1486      iv) 2982

**7. Write in standard form :**

- i) 9000 + 600 + 70 + 8
- ii) 6000 + 500 + 20 + 3
- iii) 1000 + 200 + 90 + 7
- iv) 5000 + 600 + 80 + 9

**Ch-2 Addition**

8.      TH H T O  
           9 4 0 5  
           + 1 5 9 2  
 \_\_\_\_\_  
 \_\_\_\_\_

9        TH H T O  
           1 0 2 7  
           + 5 8 3 2  
 \_\_\_\_\_  
 \_\_\_\_\_

10.     TH H T O  
           5 7 2 4  
           + 4 0 5 5  
 \_\_\_\_\_  
 \_\_\_\_\_

11.     TH H T O  
           7 4 1 4  
           + 2 4 6 3  
 \_\_\_\_\_  
 \_\_\_\_\_

**Q4. Solve the following**

**Ch-1 Numbers**

1. Write the predecessor and successor of the following:

- i) \_\_\_\_\_ 754      \_\_\_\_\_
- ii) \_\_\_\_\_ 429      \_\_\_\_\_
- iii) \_\_\_\_\_ 199      \_\_\_\_\_
- iv) \_\_\_\_\_ 4444      \_\_\_\_\_

2. Form the smallest and greatest number using the given digits

- i) 1,4,3,5    ii) 9,8,5,9    iii) 2,4,5,1

### Ch-2 Addition

3. Add by regrouping -

i)  $4879 + 1723$

ii)  $4998 + 2930$

3) Write even or odd against the following numbers

- a) 876    b) 340    c) 9965    d) 2651

### **Q5. solve the following**

#### Ch-1 Numbers

1. Arrange in ascending order

a) 3412 , 3517,3611,3413

b) 1289,1245,4527,7413

c) 7321,8321,6321,9321

2. Arrange in descending order  
order

a) 3412 , 3517,3611,3413

b) 1289,1245,4527,7413

c) 7321,8321,6321,9321

#### Ch-2 Addition

3. Arrange in column and add -

i)  $6211+1456+1250$

ii)  $5122+1325+9810$

iii)  $7104+4013+5871$

#### Ch-1 Numbers

### **Q6. Solve**

1. Write the following in Hindu-Arabic

i) XXXII

ii) VIII

iii) XIV

iv) XXXvi

2. Write the roman numerals of the following

i) 15

ii) 33

iii) 23

iv) 48

## **Ch-2 Addition**

3. Dhruv has 1483 cows on his farm . Kapil has 1938 cows. How many cows do they have in all?
4. Tanya had 9 234 marbles, Amrita gave her 187 more. How many marbles does Tanya have in all now?
5. A library has 3,245 story books and 2,136 science books. How many books are there altogether?
6. A factory made 4,327 toys in January and 3,458 toys in February. How many toys were made in both months?
7. There are 2,764 boys and 3,125 girls in a school. What is the total number of students?
8. Radha has 1298 roses and 2754 sunflowers. How many flowers does she have in all?

### **MARKING SCHEME FOR PT- 1**

#### **Examination**

**Maximum marks- 25**

#### **SECTION A**

**5X1=5**

#### **SECTION B**

**5x2=10**

#### **SECTION C**

**2x3=6**

#### **SECTION D**

**1x4=4**

# SPACE RACE TABLES



ONE
$1 \times 1 = 1$
$2 \times 1 = 2$
$3 \times 1 = 3$
$4 \times 1 = 4$
$5 \times 1 = 5$
$6 \times 1 = 6$
$7 \times 1 = 7$
$8 \times 1 = 8$
$9 \times 1 = 9$
$10 \times 1 = 10$

TWO
$1 \times 2 = 2$
$2 \times 2 = 4$
$3 \times 2 = 6$
$4 \times 2 = 8$
$5 \times 2 = 10$
$6 \times 2 = 12$
$7 \times 2 = 14$
$8 \times 2 = 16$
$9 \times 2 = 18$
$10 \times 2 = 20$

THREE
$1 \times 3 = 3$
$2 \times 3 = 6$
$3 \times 3 = 9$
$4 \times 3 = 12$
$5 \times 3 = 15$
$6 \times 3 = 18$
$7 \times 3 = 21$
$8 \times 3 = 24$
$9 \times 3 = 27$
$10 \times 3 = 30$

FOUR
$1 \times 4 = 4$
$2 \times 4 = 8$
$3 \times 4 = 12$
$4 \times 4 = 16$
$5 \times 4 = 20$
$6 \times 4 = 24$
$7 \times 4 = 28$
$8 \times 4 = 32$
$9 \times 4 = 36$
$10 \times 4 = 40$

FIVE
$1 \times 5 = 5$
$2 \times 5 = 10$
$3 \times 5 = 15$
$4 \times 5 = 20$
$5 \times 5 = 25$
$6 \times 5 = 30$
$7 \times 5 = 35$
$8 \times 5 = 40$
$9 \times 5 = 45$
$10 \times 5 = 50$




SIX
$1 \times 6 = 6$
$2 \times 6 = 12$
$3 \times 6 = 18$
$4 \times 6 = 24$
$5 \times 6 = 30$
$6 \times 6 = 36$
$7 \times 6 = 42$
$8 \times 6 = 48$
$9 \times 6 = 54$
$10 \times 6 = 60$

SEVEN
$1 \times 7 = 7$
$2 \times 7 = 14$
$3 \times 7 = 21$
$4 \times 7 = 28$
$5 \times 7 = 35$
$6 \times 7 = 42$
$7 \times 7 = 49$
$8 \times 7 = 56$
$9 \times 7 = 63$
$10 \times 7 = 70$

EIGHT
$1 \times 8 = 8$
$2 \times 8 = 16$
$3 \times 8 = 24$
$4 \times 8 = 32$
$5 \times 8 = 40$
$6 \times 8 = 48$
$7 \times 8 = 56$
$8 \times 8 = 64$
$9 \times 8 = 72$
$10 \times 8 = 80$

NINE
$1 \times 9 = 9$
$2 \times 9 = 18$
$3 \times 9 = 27$
$4 \times 9 = 36$
$5 \times 9 = 45$
$6 \times 9 = 54$
$7 \times 9 = 63$
$8 \times 9 = 72$
$9 \times 9 = 81$
$10 \times 9 = 90$

TEN
$1 \times 10 = 10$
$2 \times 10 = 20$
$3 \times 10 = 30$
$4 \times 10 = 40$
$5 \times 10 = 50$
$6 \times 10 = 60$
$7 \times 10 = 70$
$8 \times 10 = 80$
$9 \times 10 = 90$
$10 \times 10 = 100$



**RAMAKRISHNA SENIOR SECONDARY SCHOOL**

**Question bank**  
**SUBJECT: SCIENCE**  
**CLASS: III**

**Part - A**

**Ch-1 Living and Non-Living Things**

**QI. Multiple Choice Questions:**

1. Fish breathe through their \_\_\_\_\_.  
a) gills                      b) fins                      c) wing                      d) tail
2. Insect breathe through \_\_\_\_\_.  
a) nose                      b) gills                      c) ears                      d) airholes
3. Flower that open in the morning and closes at night:  
a) Morning Glory      b) Rose                      c) Lotus                      d) Sugarcane
4. Leaves of this plant closes when touched:  
a) Seedling                      b) Touch-me-not      c) Plumule                      d) Cotyledons

**CH-2 Parts of plant**

5. \_\_\_\_\_ is the most beautiful part of the plant.  
a) Flower                      b) Root                      c) Stem                      d) Seed
6. Green pigment in leaf is called \_\_\_\_\_.  
a) chlorophyll                      b) pores                      c) veins                      d) margin
7. Sweet smelling substance in flower is called \_\_\_\_\_.  
a) juice                      b) nectar                      c) milk                      d) water
8. Green leafy vegetable:  
a) ladyfinger                      b) spinach                      c) tomato                      d) potato

**CH-6 Staying safe**

9. We should not touch electric switch with \_\_\_\_\_ hands.  
a) clean                      b) wet                      c) dry                      d) dirty
10. Always walk on the \_\_\_\_\_ side of the road.  
a) left                      b) north                      c) south                      d) right
11. Example of antiseptic:  
a) Dettol                      b) Calcium                      c) Iron                      d) Sulphur
12. An unpleasant event that causes injury:  
a) Injury                      b) Accident                      c) Muscle                      d) Tendon

**Q II. Give one word:**

**Ch-1 Living and Non-Living Things**

1. Leaves of this plant close when touched -
2. Insect breathe through -

3. Flower that opens in the morning and closes at night -
4. Time during which a living thing remains -

### CH-2 Parts of plant

5. Green leafy vegetable -
6. Root which can be eaten -
7. Seed that gives us oil -
8. Stem that can be eaten -


### CH-3 Staying safe

9. Red light indicates us to -
10. Yellow light indicates us to -
11. An unpleasant event that causes injury -
12. Something that kills germs -

**Q III. Answer the following questions by observing the given picture.**

### Ch-1 Living and Non-Living Things

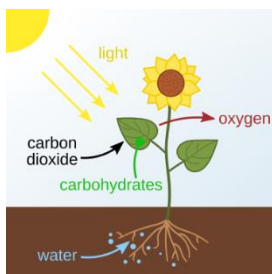
1.



- a) Identify the given picture.
- b) What are the tiny holes called?
- c) What is their role?

### CH-2 Parts of plant

2.



- a) Name the process shown in the given picture.
- b) Write two things needed for this process.
- c) Which is the main part of plant involved?

### CH-6 Staying safe

3.



- a) Identify the given picture.
- b) Name any 2 things you should keep in it.
- c) Where should we keep it?

### Part-B

### Ch-1 Living and Non-Living Things

**Q IV. Defines:**

1. Gills
2. Stomata

### CH-2 Parts of plant

3. Germination
4. Nursery

### CH-6 Staying safe

5. Antiseptic
6. Accident

**Q V. Answer the following in 20-30 words.**

### Ch-1 Living and Non-Living Things

1. Why do living things need food?
2. Draw two living and two non-living things.
3. How do living things reproduce? Give examples.
4. How do animals feel?

### CH-2 Parts of plant

5. Write any two uses of flower.

6. Why are leaves called the kitchen of the plant?
7. Draw and label the parts of plant.
8. Name the different parts of plant.

### CH-6 Staying safe

9. Write safety rules that you should follow in the playground.
10. What is first aid?
11. Write safety rules that you should follow at home.
12. Write safety rules that you should follow in the school.

**Q VI. Answer the following in 30-40 words. (Do any 1)**

### Ch-1 Living and Non-Living Things

1. Draw and label the parts of plant.
2. Write three differences between living and non-living things.

### CH-2 Parts of plant

3. What are the functions of root?
4. Give three functions of stem.

### CH-6 Staying safe

5. Write safety rules that you should follow on the road.
6. Write safety rules that you should follow in the school.

### PT- 1 Syllabus

**Ch- 1 Living and Non-Living Things**

**Ch- 2 Parts of a plant**

**Ch- 6 Staying safe**

### Marking Scheme

<b>MCQ</b>	<b><math>\frac{1}{2}M \times 6Q = 3M</math></b>
<b>Give one word</b>	<b><math>\frac{1}{2}M \times 6Q = 3M</math></b>
<b>Picture based question</b>	<b><math>1M \times 3Q = 3M</math></b>
<b>Define</b>	<b><math>1M \times 3Q = 3M</math></b>
<b>Answer in 20-30 words</b>	<b><math>2M \times 5Q = 10M</math></b>
<b>Answer in 30-40 words ( 1 choice )</b>	<b><math>3M \times 1Q = 3M</math></b>

**Total marks = 25**

**Ch- 1 Me with my Family**

**1. Multiple Choice Questions (MCQs)**

1. A family is a group of people who
  - a) play together only
  - b) live and care for each other
  - c) work in a school
  - d) travel together
2. Who usually takes care of us when we are sick?
  - a) Neighbours
  - b) Family members
  - c) Shopkeepers
  - d) Drivers
3. A family with grandparents, parents, and children living together is called a
  - a) small family
  - b) joint family
  - c) school family
  - d) friend family
4. Which of these is a good family value?
  - a) Fighting
  - b) Sharing
  - c) Shouting
  - d) Ignoring others
5. Your mother's or father's brother is your
  - a) cousin
  - b) uncle
  - c) nephew
  - d) grandfather

**Ch-2 How I Care for My Surroundings**

**Q1. Multiple Choice Questions (MCQs)**

1. We should throw waste in a
  - a) river
  - b) dustbin
  - c) playground
  - d) road
2. Which of these helps keep our surroundings clean?
  - a) Littering
  - b) Spitting
  - c) Sweeping
  - d) Wasting water
3. Plants help us by giving
  - a) plastic
  - b) smoke
  - c) fresh air
  - d) dust

4. Which colour dustbin is commonly used for wet waste?
  - a) Blue
  - b) Green
  - c) Black
  - d) Red
5. To save water, we should
  - a) keep taps open
  - b) waste water while washing
  - c) close taps properly
  - d) play with water daily

## **Ch-5 We Need Air and Water**

### **Q1. Multiple Choice Questions (MCQs)**

1. We need air for
  - a) sleeping
  - b) breathing
  - c) reading
  - d) writing
2. Which of these is a source of water?
  - a) Chair
  - b) River
  - c) Book
  - d) Table
3. Plants need \_\_\_\_\_ to grow.
  - a) toys
  - b) water
  - c) shoes
  - d) pencils
4. Clean water is important for
  - a) drinking
  - b) washing
  - c) cooking
  - d) all of these
5. Air around us is called the
  - a) atmosphere
  - b) playground
  - c) classroom
  - d) forest

---

## **Ch- 1 Me with my Family**

### **Q2. Fill in the Blanks**

1. We should always respect our \_\_\_\_\_.
2. A family teaches us love and \_\_\_\_\_.
3. My father's father is my \_\_\_\_\_.
4. Family members help each other in times of \_\_\_\_\_.
5. We celebrate festivals together with our \_\_\_\_\_.

## **Ch-2 How I Care for My Surroundings**

### **Q2. Fill in the Blanks**

1. We should keep our surroundings \_\_\_\_\_.
2. Trees give us fresh \_\_\_\_\_.
3. We must switch off lights and fans when not in \_\_\_\_\_.
4. Waste should be thrown into a \_\_\_\_\_.
5. We should save \_\_\_\_\_ and electricity.

## **Ch-5 We Need Air and Water**

### **Q2. Fill in the Blanks**

1. We cannot live without \_\_\_\_\_ and water.
2. Fish live in \_\_\_\_\_.
3. We should drink \_\_\_\_\_ water.
4. Moving air is called \_\_\_\_\_.
5. Plants take in carbon dioxide and give out \_\_\_\_\_.

## **Ch- 1 Me with my Family**

### **Q3. True or False**

1. Family members should care for each other. \_\_\_\_\_
2. A joint family has only parents and one child. \_\_\_\_\_
3. We learn good manners from our family. \_\_\_\_\_
4. Grandparents tell us stories and teach us values. \_\_\_\_\_
5. We should fight with our siblings every day. \_\_\_\_\_

## **Ch-2 How I Care for My Surroundings**

### **Q3. True or False**

1. We should plant more trees. \_\_\_\_\_
2. Throwing garbage on roads keeps the city clean. \_\_\_\_\_
3. Saving water is a good habit. \_\_\_\_\_
4. We should keep our classroom neat and tidy. \_\_\_\_\_
5. Burning plastic is safe for the environment. \_\_\_\_\_

## **Ch-5 We Need Air and Water**

### **Q3. True or False**

1. Water is needed by all living things. \_\_\_\_\_
2. Dirty water is safe to drink. \_\_\_\_\_
3. Air has no importance in our life. \_\_\_\_\_
4. We should save water. \_\_\_\_\_
5. Plants and animals both need air. \_\_\_\_\_

## **Ch- 1 Me with my Family**

### **Q4. Short Answer Questions**

1. What is a family?
2. Name any two members of your family.
3. How do family members help each other?
4. What do you learn from your grandparents?
5. Why should we respect elders in the family?

## **Ch-2 How I Care for My Surroundings**

### **Q4. Short Answer Questions**

1. Why should we keep our surroundings clean?
2. Name two ways to save water.
3. How can you help keep your classroom clean?
4. Why are trees important?

5. What should you do with garbage?

## **Ch-5 We Need Air and Water**

### **Q4. Short Answer Questions**

1. Why do we need air?
2. Name any two sources of water.
3. Why should we drink clean water?
4. How do plants help us?
5. What can we do to save water?

## **Ch- 1 Me with my Family**

### **Q5. Match the Following**

#### **Column A**

#### **Column B**

- |                   |   |
|-------------------|---|
| 1. Joint Family   | a. small number of members                      |
| 2. Nuclear Family | b. We should respect them                       |
| 3. Elders         | c. Share and care                               |
| 4. Family Members | d. Grandparents, parents, and children together |
| 5. Home           | e. A place where family lives                   |

## **Ch-2 How I Care for My Surroundings**

### **Q5. Match the Following**

#### **Column A**

#### **Column B**

- |                      |                             |
|----------------------|-----------------------------|
| 1. Trees             | a. Saves electricity        |
| 2. Dustbin           | b. Gives fresh air          |
| 3. Switch off lights | c. Keeps surroundings clean |
| 4. Water plants      | d. Helps plants grow        |

## **Ch-5 We Need Air and Water**

### **Q5. Match the Following**

#### **Column A**

#### **Column B**

- |           |                         |
|-----------|-------------------------|
| 1. Air    | a. Fish live here       |
| 2. Water  | b. Needed for breathing |
| 3. River  | c. Used for drinking    |
| 4. Plants | d. Need water to grow   |

## **Ch- 1 Me with my Family**

### **Q6. Long Answer Questions**

1. Write a few lines about your family.
2. Describe how your family celebrates festivals together.
3. What are the responsibilities of family members at home?

## **Ch-2 How I Care for My Surroundings**

### **Q6. Long Answer Questions**

1. Write five sentences on how you care for your surroundings.
2. Explain why cleanliness is important.
3. Describe ways to protect the environment at home and school.

## **Ch-5 We Need Air and Water**

### **Q6. Long Answer Questions**

1. Write five sentences about the importance of water.
2. Explain why air is important for living things.

3. Describe different uses of water in daily life.

**PT- 1 Syllabus**

CHAPTER 1- Me With My Family

CHAPTER 2- How I Care for My Surroundings

CHAPTER -5 We Need Air and Water

**Marking Scheme**

Fill in the blanks- (6x ½ = 3M)

Name them- (4x ½ =2M)

Define- (2x1 = 2M)

Answer in one sentence- (5x1=5M)

Answer in 20-30 words (5 x 2 = 10M)

Answer in 30-40 words (1 x3 = 3M)

(1 choice)

**Total marks = 25**

# L-1 Hardware and Software

## Assignment 1

### Q1. Multiple Choice Questions (MCQs)

1. Which part is called the brain of the computer?

- a) Mouse      b) Keyboard      c) CPU ✓      d) Printer

2. Which of these is hardware?

- a) Paint      b) MS Word      c) Calculator app      d) Monitor ✓

3. Hardware means:

- a) Instructions      b) Physical parts of a computer ✓      c) Games      d) Drawings

4. Software is a:

- a) Machine      b) Device      c) Set of instructions ✓      d) Cable

5. Which software helps the computer to work properly?

- a) System software ✓      b) Multimedia software      c) Game software      d) Drawing software

6. Which software is used for typing documents?

- a) Word processing software ✓      b) Spreadsheet software      c) Multimedia software  
d) Graphic software

7. Spreadsheet software is mainly used for:

- a) Watching videos      b) Calculations ✓      c) Drawing      d) Printing

8. Multimedia software is used for:

- a) Typing only      b) Scanning      c) Calculations only      d) Sound and videos ✓

9. Which of these is application software?

- a) CPU      b) Keyboard      c) MS Word ✓      d) Mouse

10. Which device helps us move the pointer on the screen?

- a) Printer      b) Mouse ✓      c) Speaker      d) Scanner

11. Which hardware is used to print on paper?

- a) Printer ✓      b) Monitor      c) CPU      d) Speaker

12. Which memory stores data temporarily?

- a) ROM   b) USB   **c) RAM** ✓   d) CD

13. Which memory stores data permanently?

- a) RAM   **b) ROM** ✓   c) Mouse   d) Monitor

14. UPS gives:

- a) Music   b) Internet   **c) Backup power** ✓   d) Pictures

15. Which of these can be touched?

- a) Software   b) Program   **c) Instructions** ✓   d) Hardware

16. What does CPU stand for?

- a) Central Processing Unit** ✓   b) Control Program Unit

- c) Central Print Unit   d) Computer Power Unit

17. Graphic software is used to:

- a) Type letters   b) Play music   **c) Draw pictures** ✓   d) Do calculations

18. A computer cannot work without:

- a) Table   **b) Software** ✓   c) Chair   d) Fan

19. Which of these is NOT hardware?

- a) Keyboard   b) Printer   **c) Paint** ✓   d) Mouse

20. What happens to RAM data when the computer is switched off?

- a) It gets erased** ✓   b) It becomes software

- c) It is saved forever   d) It prints automatically

# L-2 Getting Started with Windows

## Assignment 2

### Q1. Multiple Choice Questions (MCQs)

1. What is Windows 10?

- a) A game                      **b) An operating system ✓**                      c) A mouse                      d) A printer

2. What is the main screen of Windows 10 called?

- a) Taskbar                      **b) Desktop ✓**                      c) Start Menu                      d) Folder

3. Small pictures on the desktop are called \_\_\_\_\_.

- a) Icons ✓**                      b) Files                      c) Wallpapers                      d) Screensavers

4. What does GUI stand for?

- a) Graphic User Icon                      **b) Graphical User Interface ✓**  
c) Great User Internet                      d) Graphic Utility Interface

5. Which bar is found at the bottom of the desktop?

- a) Menu bar                      b) Title bar                      **c) Taskbar ✓**                      d) Tool bar

6. Which button is found on the left side of the taskbar?

- a) Enter button                      **b) Start button ✓**                      c) Delete button                      d) Shift button

7. Where can you see the date and time in Windows 10?

- a) Desktop                      b) Start Menu                      **c) Notification Area ✓**                      d) Recycle Bin

8. What is the background image on the desktop called?

- a) Wallpaper ✓**                      b) Folder                      c) Window                      d) File

9. Which image appears when the computer remains idle for some time?

- a) Icon                      b) Taskbar                      **c) Screen saver ✓**                      d) Folder

10. Which icon stores deleted files temporarily?

- a) This PC                      b) Folder                      **c) Recycle Bin ✓**                      d) Paint

11. What is wallpaper?

- a) A game    b) A folder    **c) Background image on the desktop ✓**    d) A program

12. Which button is present at the bottom-left corner of the taskbar?

- a) Close button    **b) Start button ✓**    c) Maximize button    d) Restore button

13. Screen saver appears when the computer:

- a) Shuts down   b) Restarts   **c) Remains idle for some time✓**   d) Opens a file

14. Which of these is a component of the taskbar?

- a) Notification Area✓**   b) Wallpaper   c) Folder   d) File

15. Which key combination is used to view open windows?

- a) Ctrl + C   **b) Alt + Tab✓**   c) Ctrl + P   d) Shift + Enter

16. Which option is used to turn off the computer safely?

- a) Shut Down✓**   b) Log off   c) Restart   d) Refresh

17. What does the Show Desktop button do?

- a) Deletes files   **b) Hides all open windows✓**   c) Opens Paint   d) Starts games

18. Booting means \_\_\_\_\_.

- a) Deleting files                      **b) Starting the computer✓**  
c) Opening Paint                      d) Closing programs

19. Which of these can be moved on the desktop?

- a) Icons✓**   b) Wallpaper   c) Taskbar clock   d) Start menu

20. Which feature makes interaction between user and computer easy?

- a) CPU   **b) GUI✓**   c) Printer   d) Scanner